

KHIDWAI ENGLISH SCHOOL

UNIT 1 ADDITION

Addition: Means the act of adding any two things(digits)

KEY WORDS:

*Add

*Total

*Altogether

*Sum

*More

I Addition table:

$0+1=1$	$1+1=2$	$2+1=3$
$0+2=2$	$1+2=3$	$2+2=4$
$0+3=3$	$1+3=4$	$2+3=5$
$0+4=4$	$1+4=5$	$2+4=6$
$0+5=5$	$1+5=6$	$2+5=7$
$0+6=6$	$1+6=7$	$2+6=8$
$0+7=7$	$1+7=8$	$2+7=9$
$0+8=8$	$1+8=9$	$2+8=10$
$0+9=9$	$1+9=10$	$2+9=11$
$0+10=10$	$1+10=11$	$2+10=12$

II. Fill the following:

Example: $3+2=2+3$, $0+9=9+0$, $5+3=3+5$

$0+2=2+ \underline{\quad}$, $5+0=0+ \underline{\quad}$, $6+3=3+ \underline{\quad}$, $9+2= \underline{\quad}+9$

$7+5= \underline{\quad}+5$, $3+9=9+ \underline{\quad}$, $6+5=5+ \underline{\quad}$, $6+7=7+ \underline{\quad}$

$2+4=4+ \underline{\quad}$, $\underline{\quad}+4=4+3$, $3+1= \underline{\quad}+1$, $3+8=8+ \underline{\quad}$

III. Multiplication table of (ZERO and 1)

$0 \times 1 = 0$	$1 \times 1 = 1$
$0 \times 2 = 0$	$1 \times 2 = 2$
$0 \times 3 = 0$	$1 \times 3 = 3$
$0 \times 4 = 0$	$1 \times 4 = 4$
$0 \times 5 = 0$	$1 \times 5 = 5$
$0 \times 6 = 0$	$1 \times 6 = 6$
$0 \times 7 = 0$	$1 \times 7 = 7$
$0 \times 8 = 0$	$1 \times 8 = 8$
$0 \times 9 = 0$	$1 \times 9 = 9$
$0 \times 10 = 0$	$1 \times 10 = 10$

IV Find the sum:

1) 8 2) 9 3) 8 4) 7 5) 3 6) 0

+ 7 + 8 +7 + 9 +7 9

7) 5	8) 4	9) 7	10) 9	11) 8
+ 6	+ 7	+ 7	+ 6	+ 6
_____	_____	_____	_____	_____

12) 9	13) 0	14) 5	15) 8	16) 9
+ 8	+ 7	+ 8	+ 7	+ 6
_____	_____	_____	_____	_____


17) 5	18) 0	19) 8	20) 5	21) 6
+ 5	+ 8	+ 6	+ 2	+ 6
_____	_____	_____	_____	_____


22) 4	23) 9	24) 6	25) 7	26) 3
+ 4	+ 9	+ 6	+ 7	+ 9
_____	_____	_____	_____	_____


27) 8	28) 5	29) 7	30) 9	31) 5
+ 8	+ 9	+ 3	+ 2	+ 0
_____	_____	_____	_____	_____


VI : Simple word problems:

1) Subhaan has 6 balls. Eqlas gives him 7 balls. Now how many balls has he?

A) Number of balls Subhaan has = 6 

Number of balls given by Eqlas = +7 

Total number of balls Subhaan has = 13 




2) There are 8 strawberries in Myiesha's plate. Asiya put 5 strawberries in it. How many strawberries are there in the plate?


A) Number of strawberries in Myeisha's plate = 8

Number of strawberries put by Asiya = + 5

Total number of strawberries in the plate = 13

3) Harmain gifted 6 cars to her friend Subiya. Zahra gifted 5 cars to her friend Subiya. How many cars has Subiya?

A) Number of cars gifted by Harmain = 6 

Number of cars gifted by Zahra = + 5 

Total number of cars = 11 

Subiya has 

